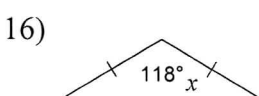
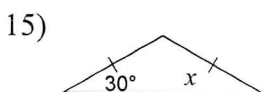
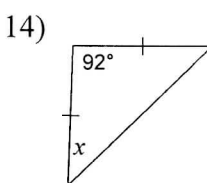
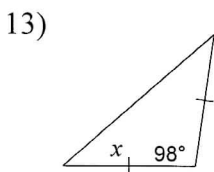
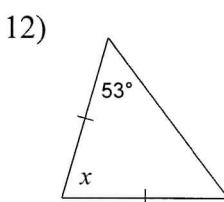
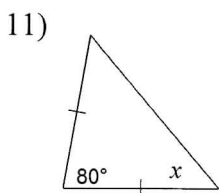
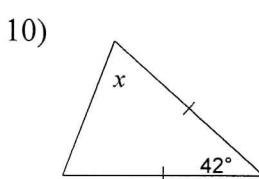
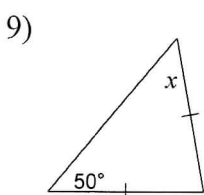
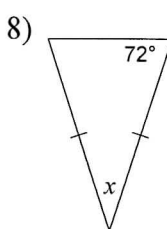
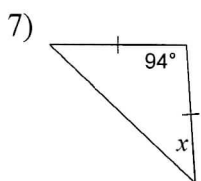
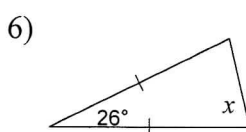
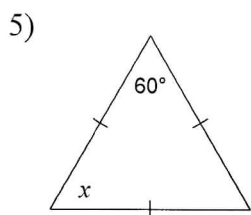
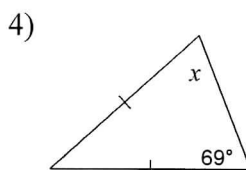
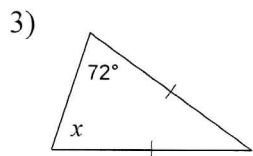
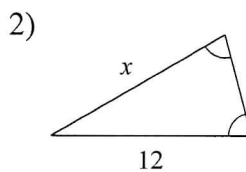
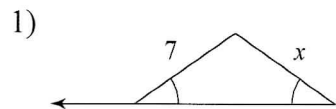
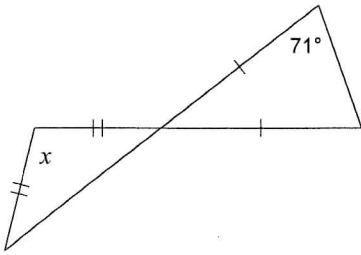


7-8 Isosceles and Equilateral Triangles (ver1)_hw

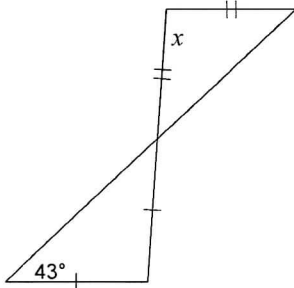
Find the value of x .



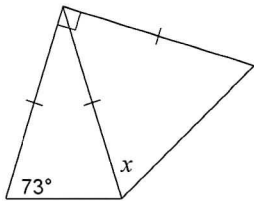
17)



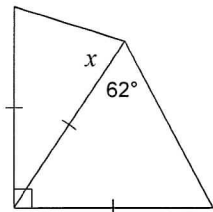
19)



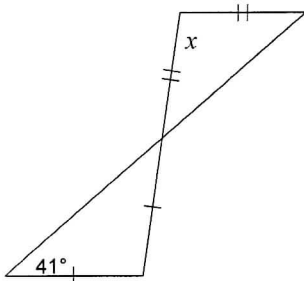
21)



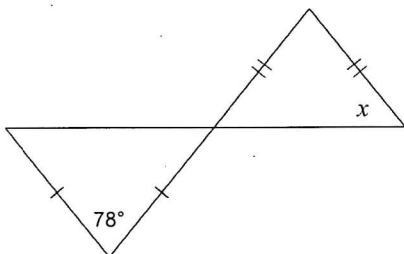
23)



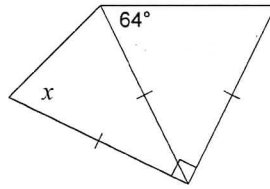
25)



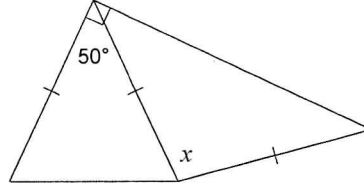
27)



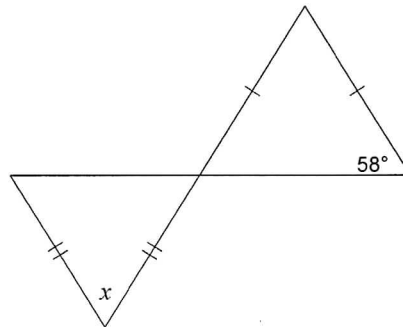
18)



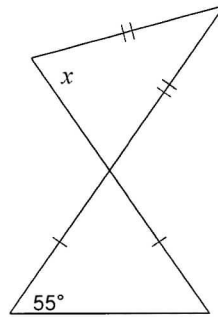
20)



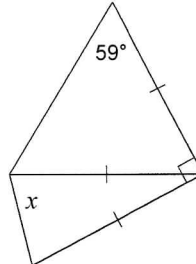
22)



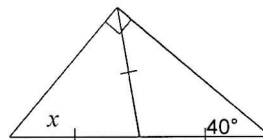
24)



26)



28)



Answers to 7-8 Isosceles and Equilateral Triangles (ver1)_hw

- 1) 7
- 2) 12
- 3) 72°
- 4) 69°
- 5) 60°
- 6) 77°
- 7) 43°
- 8) 36°
- 9) 50°
- 10) 69°
- 11) 50°
- 12) 74°
- 13) 41°
- 14) 44°
- 15) 30°
- 16) 31°
- 17) 104°
- 18) 71°
- 19) 94°
- 20) 100°
- 21) 62°
- 22) 73°
- 23) 73°
- 24) 70°
- 25) 98°
- 26) 76°
- 27) 51°
- 28) 50°